

# 1

91037



NEW ZEALAND QUALIFICATIONS AUTHORITY  
MANA TOHU MĀTAURANGA O AOTEAROA

SUPERVISOR'S USE ONLY

## Level 1 Mathematics and Statistics, 2011

### 91037 Demonstrate understanding of chance and data

9.30 am Monday 14 November 2011

Credits: Four

Achievement	Achievement with Merit	Achievement with Excellence
Demonstrate understanding of chance and data.	Demonstrate understanding of chance and data, justifying statements and findings.	Demonstrate understanding of chance and data, showing statistical insight.

Check that the National Student Number (NSN) on your admission slip is the same as the number at the top of this page.

**You should attempt ALL the questions in this booklet.**

Show ALL working.

If you need more space for any answer, use the page(s) provided at the back of this booklet and clearly number the question.

Check that this booklet has pages 2–13 in the correct order and that none of these pages is blank.

**YOU MUST HAND THIS BOOKLET TO THE SUPERVISOR AT THE END OF THE EXAMINATION.**

**TOTAL**

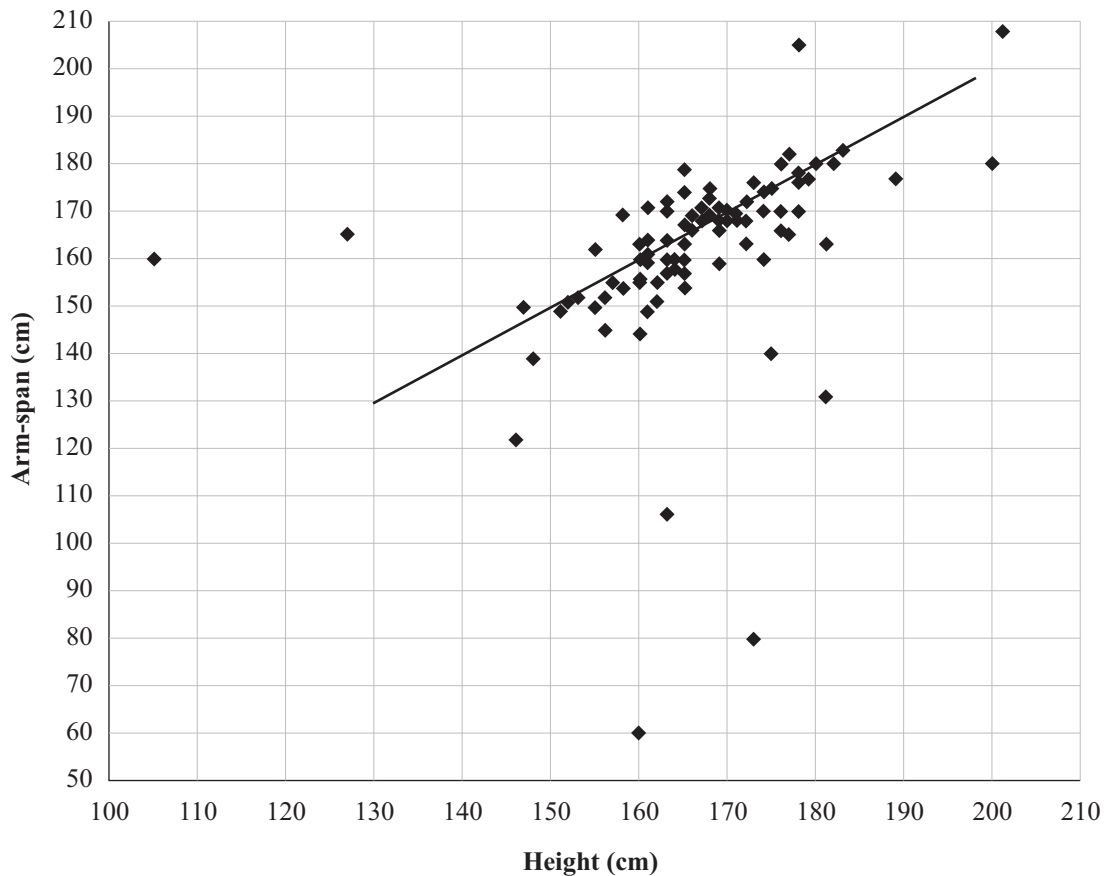
ASSESSOR'S USE ONLY

You are advised to spend 60 minutes answering the questions in this booklet.

### QUESTION ONE

Tuahu's grandfather told him that a person's arm-span is often the same as their height (your arm-span is the distance from the fingertips of your left hand to the fingertips of your right hand, when your arms are stretched out).

Tuahu wondered if this was true. He collected measurements from 100 randomly selected year 10 boys and girls. He drew a scattergraph of the results. He added a line of best fit to the graph. The results are shown on the graph below and some statistics are listed in the table.



Statistics	Height	Arm-span
mean	166	162
minimum	105	60
lower quartile	160	157
median	165	165
upper quartile	173	171
maximum	201	208
range	96	148
inter-quartile range	13	14





**QUESTION TWO**

Alice's local supermarket is running a competition.

On the back of each docket is printed one of the letters of the word ANKARA, a city in Turkey.

If Alice can collect the six letters needed to spell Ankara, she will go in the draw for a holiday to Turkey.

- (a) On each of the 5 weekdays for 5 weeks Alice finds a discarded docket as she passes the supermarket.

In the order that she collects them, the letters collected are:

**N K K R R N A K A R N N A K K N R N A A A K K R R**

- (i) Complete the table to summarise her data:

Letter	Frequency
A	
K	
N	6
R	

- (ii) Using her data, what is the probability of Alice getting a K on the next docket?

---



---

- (iii) How valid is this probability? Give at least 2 statistical reasons for your answer.

---



---



---



---



---



---



---



---



---



---



---



---



---



---



---



---



---



---



---



---



---



---

Alice wonders how many docketts she would have to collect, on **average**, to be able to spell the word ANKARA.

- (b) Using her collection of docketts in (a), how many docketts did Alice collect before she had the whole word of ANKARA?

---

- (c) Alice realises that it will take too long to find an answer by collecting actual docketts. Instead, she takes a dice and puts the **six** letters of A, N, K, A, R, A on it.

Alice wants to find out, on average, how many times she must roll the dice to spell the word ANKARA.

She rolls the dice and whatever letter is on top, she imagines is the letter she has found on the back of a docket.

Once she has all the letters she needs to spell Ankara, she begins again.

She stops her experiment when she has spelt the word Ankara 10 times.



R, K, N, A, A, K, K, K, A  
 A, A, N, A, R, A, K  
 A, N, N, K, A, N, R, A  
 K, A, K, K, R, A, A, A, N  
 R, A, N, A, A, R, A, K  
 N, A, R, R, A, A, A, K  
 A, A, A, A, R, A, R, A, N, R, A, A, A, A, R, A, A, N, R, N, A, K  
 N, K, A, A, N, A, A, N, A, K, N, A, R  
 N, K, A, N, N, A, N, A, A, R  
 A, A, K, A, K, A, N, N, A, R

Alice then uses her results to find out how many docketts she needed to spell the whole word of ANKARA.

Her results are: 9, 7, 8, 9, 8, 8, 22, 13, 10, 10

- (i) Using Alice's data, give Alice an answer to her question:  
 "How many docketts would she have to collect, on average, to be able to spell the word ANKARA?"

Give at least TWO averages.

---

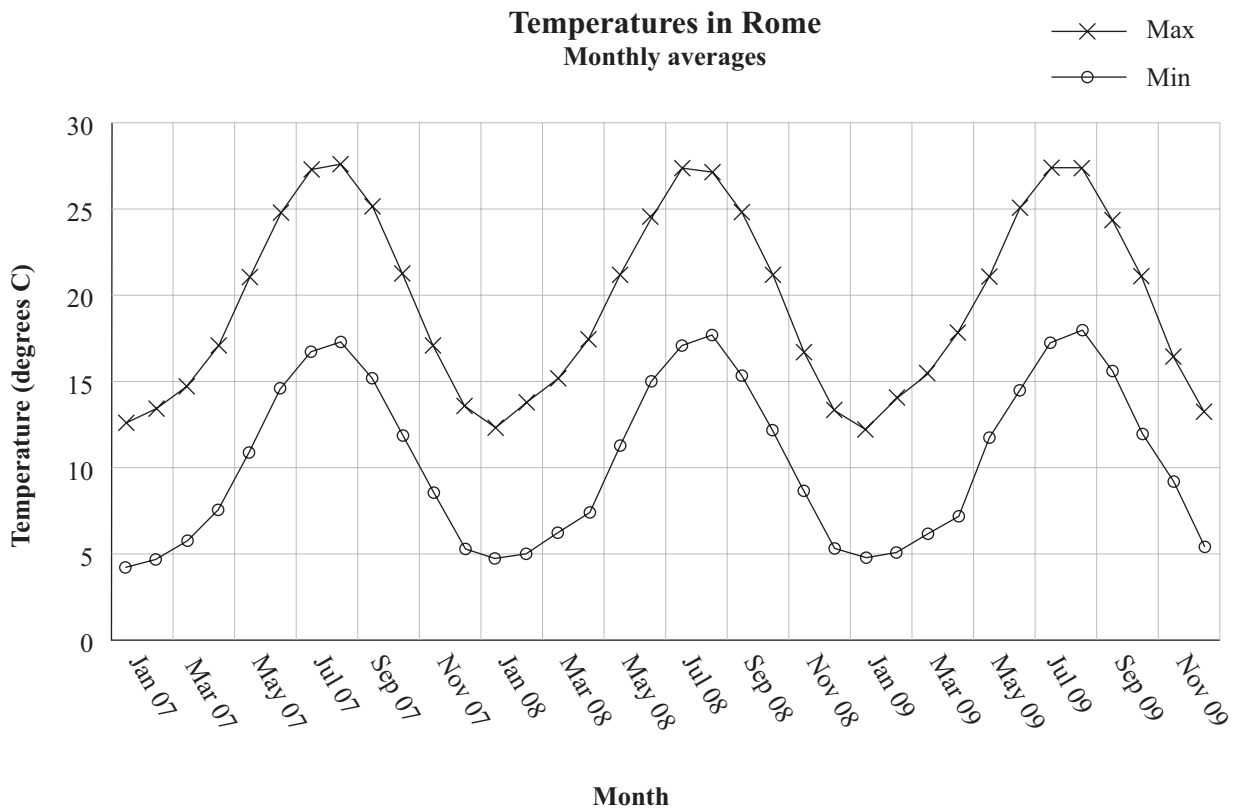
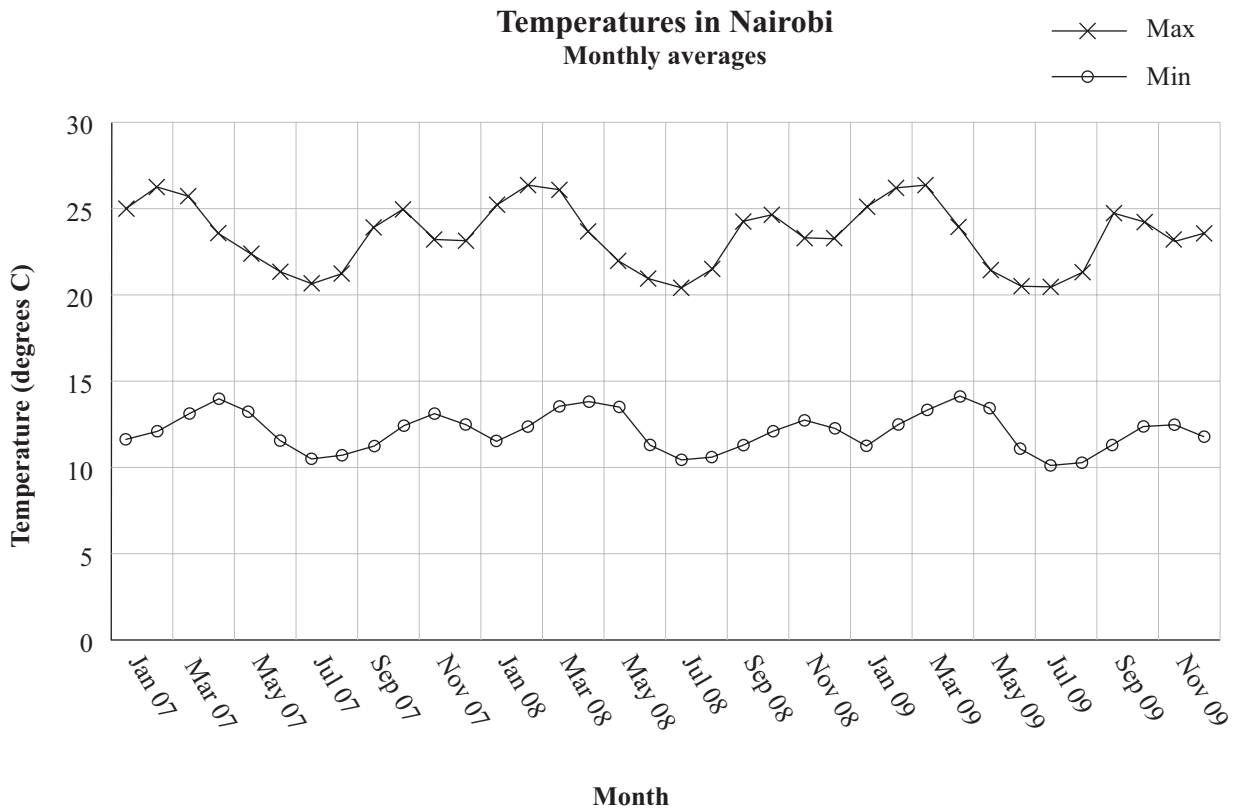


---



## GRAPHS FOR QUESTION THREE

Data source: <http://www.worldclimate.com/>





**QUESTION THREE**

Richard wants to move overseas to a warmer city. He would like to move to either Rome or Nairobi. The graphs on page 8 show the monthly average minimum and maximum temperatures in each city for three years from 2007 to 2009.

Richard decides to move to Rome because he thinks:

- The temperature in Rome is higher than the temperature in Nairobi, so Rome is warmer.
- The maximum temperature in Rome peaks every year, which is more pleasant to live in.
- The temperature in Rome is less variable over a year, so this is more pleasant.
- The temperature appears to be rising in Rome, so it will get warmer in future.
- There is less difference between the maximum and minimum temperature in Rome, so it will be more comfortable.

Use the graphs given on page 8 to answer each of questions (a) to (f). You do **not** need to explain why the climate features happen.

- (a) Is Richard correct to believe that the temperature in Rome is higher than the temperature in Nairobi, so Rome is warmer? Justify your answer using the graphs.

---

---

---

---

---

---

---

---

- (b) Comment on how the maximum and minimum temperatures in the two cities vary over a year.

---

---

---

---

---

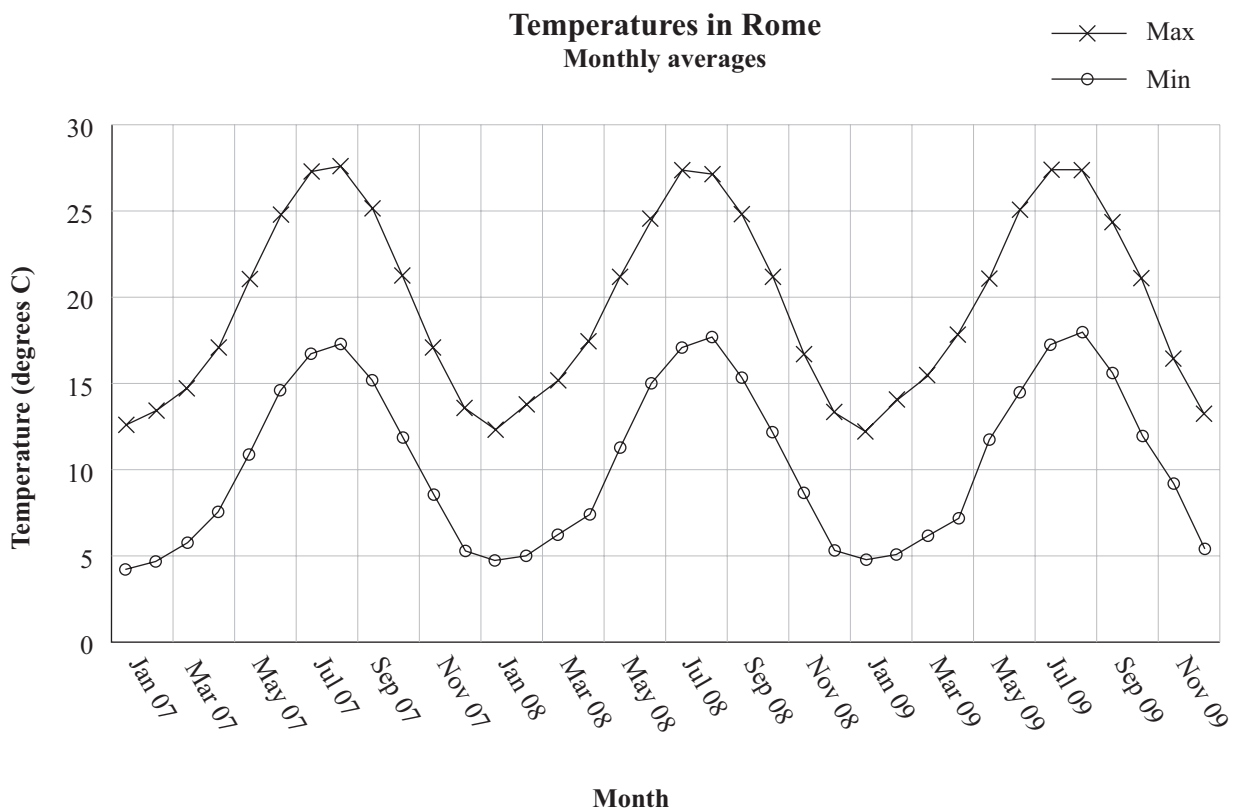
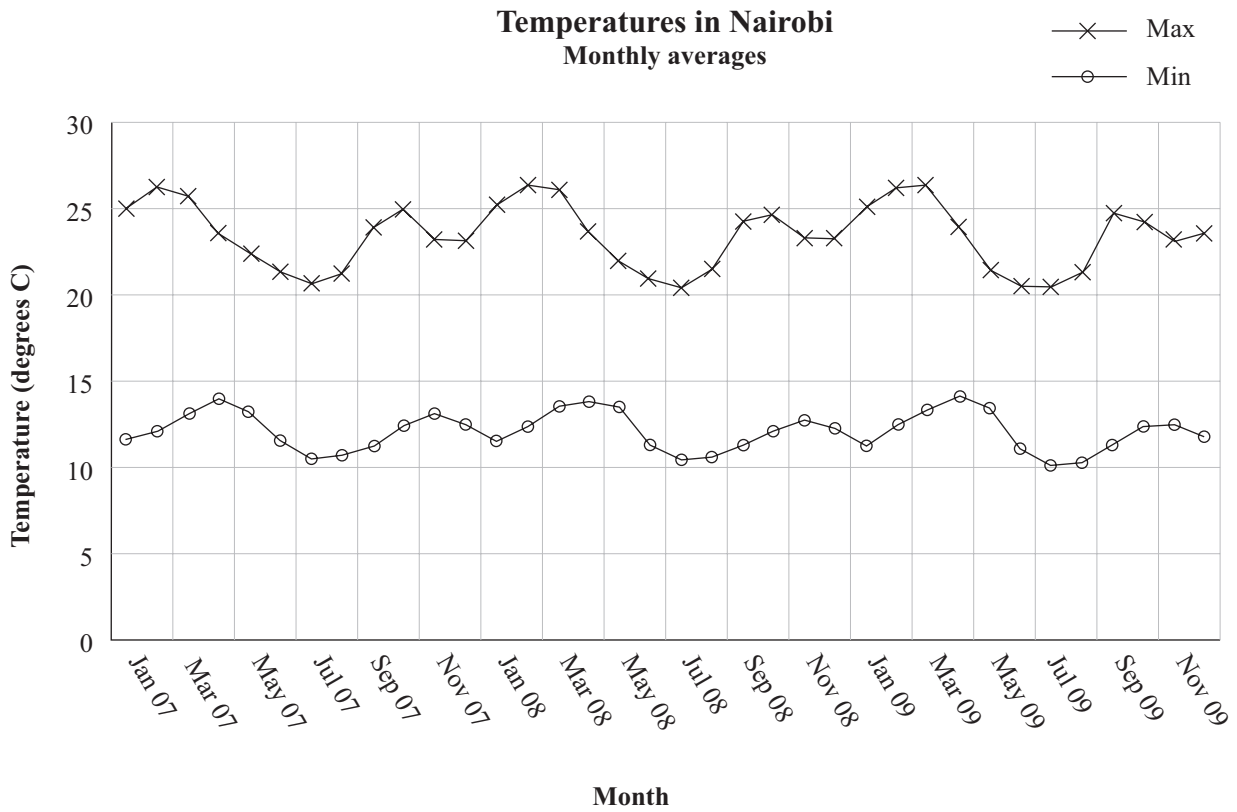
---

---

---

**GRAPHS (reprinted from page 8)**

Data source: <http://www.worldclimate.com/>



- (c) Richard has been told that both the maximum and minimum temperatures vary less in Rome than they do in Nairobi. Do the graphs support this? Justify your answer.

---

---

---

---

---

---

---

---

---

---

---

---

- (d) Richard thinks that “the temperature appears to be rising in Rome, so it will get warmer in the future”. Do you agree? Justify your answer, using the graphs.

---

---

---

---

---

---

---

---

---

---

---

---

- (e) Is Richard correct to say that “the difference between the maximum and minimum temperature is less in Rome”? Justify your answer using the graphs.

---

---

---

---

---

---

---

---

---

---

---

---









91037