

# 2

91261M



912615



NEW ZEALAND QUALIFICATIONS AUTHORITY  
MANA TOHU MĀTAURANGA O AOTEAROA

QUALIFY FOR THE FUTURE WORLD  
KIA NOHO TAKATŪ KI TŌ ĀMUA AO!

SUPERVISOR'S USE ONLY

## Te Pāngarau me te Tauanga, Kaupae 2, 2016

### 91261M Te whakahāngai tūāhua taurangi hei whakaoti rapanga

9.30i te ata Rāpare 24 Whiringa-ā-rangi 2016  
Whiwhinga: Whā

Paetae	Kaiaka	Kairangi
Te whakahāngai tūāhua taurangi hei whakaoti rapanga.	Te whakahāngai tūāhua taurangi mā te whakaaro whaipānga hei whakaoti rapanga.	Te whakahāngai tūāhua taurangi mā te whakaaro waitara hōhonu hei whakaoti rapanga.

Tirohia mēnā e rite ana te Tau Ākonga ā-Motu (NSN) kei runga i tō puka whakauru ki te tau kei runga i tēnei whārangi.

**Me whakamātau koe i ngā tūmahi KATO A kei roto i tēnei pukapuka.**

Tirohia mēnā kei a koe te Puka Tikanga Tātai L2-MATHMF.

Whakaaturia ngā mahinga KATO A.

Mēnā ka hiahia whārangi atu anō koe mō ō tuinga, whakamahia te (ngā) whārangi wātea kei muri o tēnei pukapuka, ka āta tohu ai i te tau tūmahi.

**Me whakaatu e koe ngā mahinga taurangi i tēnei pepa. Mā te whakamahi anake i ngā tikanga o te kimikimi ka tiro tiro me te whakatika ka herea te ākonga ki te taumata Paetae.**

Tirohia mēnā e tika ana te raupapatanga o ngā whārangi 2–19 kei roto i tēnei pukapuka, ka mutu, kāore tētahi o aua whārangi i te takoto kau.

**ME HOATU RAWA KOE I TĒNEI PUKAPUKA KI TE KAIWHAKAHAERE Ā TE MUTUNGA O TE WHAKAMĀTAUTAU.**

TAPEKE

MĀ TE KAIMĀKA ANAKE

## TŪMAHI TUATAHI

- (a) Whakarūnāhia  $\left(\frac{3b}{c^2}\right)^{-4}$  ka tuhi ai i te otinga kia tōruna ngā taipū.

---



---



---



---

- (b) Tuhi  $x^2 - 8x + 10$  kia pēnei te āhua  $(x - p)^2 + q$ .

---



---



---



---

- (c) (i) Me whakaatu ko ngā otinga o te whārite  $x^2 + x - 56 = 0$  he whā whakareatanga ake o ngā otinga o te whārite  $4x^2 + x - 14 = 0$ .

---



---



---



---



---



---

- (ii) Kimihia te pānga i waenga i ngā otinga o te whārite  $dx^2 + ex + f = 0$  me ngā otinga o te whārite  $x^2 + ex + df = 0$ , ina ko  $d$ ,  $e$ , me  $f$  he tau tūturu.

---



---



---



---



---



---

**QUESTION ONE**

- (a) Simplify  $\left(\frac{3b}{c^2}\right)^{-4}$  leaving your answer with positive indices.

---

---

---

---

- (b) Write  $x^2 - 8x + 10$  in the form  $(x - p)^2 + q$ .

---

---

---

---

- (c) (i) Show that the solutions of the equation  $x^2 + x - 56 = 0$  are four times the solutions of the equation  $4x^2 + x - 14 = 0$ .

---

---

---

---

---

---

---

---

- (ii) Find the relationship between the solutions of the equation  $dx^2 + ex + f = 0$  and the solutions of the equation  $x^2 + ex + df = 0$ , where  $d$ ,  $e$ , and  $f$  are real numbers.

---

---

---

---

---

---

---

---





## TŪMAHI TUARUA

- (a) Kimihia te *discriminant* o te whārite pūrua  $x^2 = 10x + 3$ .

---



---



---



---

- (b) Whakarūnāhia  $\frac{4 \log(u^3)}{\log u}$ .

---



---



---



---

- (c) Ka hokona mai e Maria he waka hou mō te \$24 990.

Ka heke te uara o te waka i ia tau mā te 12%.

Ka tāea te whakatauiria te uara o te waka, \$ $P$ ,  $t$  tau i muri i tana hokotanga mai, mā te pānga o te āhua  $P = A(r)^t$ .

E hia te roa ka haurua te uara o te waka?

---



---



---



---



---



---



---



---



---



---



---



---



---



---



---



---













**TŪMAHI TUATORU**

- (a) Ki hea tapahi ai te kauwhata o  $y = 12x^2 - x - 6$  i te tuaka  $x$ ?

---

---

---

---

---

---

---

---

- (b) Mō (t)ēhea uara o  $x$  ko  $\log_x(216) = 3$ ?

---

---

---

---

---

---

- (c) Hurinahatia te whārite e whai ake kia noho ko  $x$  te kaupapa:  $\frac{4x}{5} = \frac{y(x+3)}{2}$ .

---

---

---

---

---

---

---

---

---

---

---

---

**Ka haere tonu te Tūmahi  
Tuatoru i te whārangi 14.**

**QUESTION THREE**ASSESSOR'S  
USE ONLY

- (a) Where would the graph of  $y = 12x^2 - x - 6$  cut the  $x$ -axis?

---

---

---

---

---

---

---

---

- (b) For what value(s) of  $x$  does  $\log_x(216) = 3$ ?

---

---

---

---

---

- (c) Rearrange the following formula to make  $x$  the subject:  $\frac{4x}{5} = \frac{y(x+3)}{2}$ .

---

---

---

---

---

---

---

---

---

---

**Question Three continues  
on page 15.**

- (d) Whakaotihia te whārite  $9^{8n+6} = 27^{n^2-1} \times 3^{1-3n}$ .

---

---

---

---

---

---

---

---

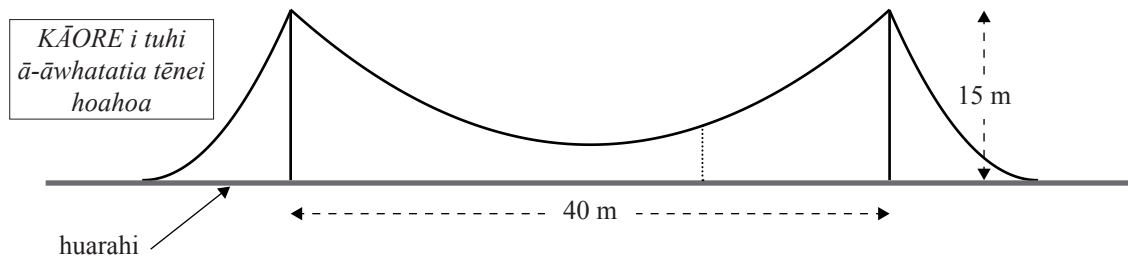
---

---

---

---

- (e) He unahi te āhua o te taura o waenga o tētahi piriti hangarite, e ai ki te hoahoa i raro. Ko ngā pourewa e toko ana i te taura he 15 m te teitei me te 40 m te tawhiti tētahi i tētahi. I te pūwāhi o waenga i waenganui i ngā pourewa, ko te teitei o te taura i runga ake i te huarahi he 3 m.
- Ka whakatūhia he pou poutū (kua tuhia ā-ira ki te hoahoa) ki te 10 m mai i te pokapū o te piriti, ā, ka pā atu ki te taura.



- (i) Whakamahia te taurangi hei whakaatu he 6 m te teitei o te pou.

---

---

---

---

---

---

---

---

---

---

---

---

- (d) Solve the equation  $9^{8n+6} = 27^{n^2-1} \times 3^{1-3n}$ .

---

---

---

---

---

---

---

---

---

---

---

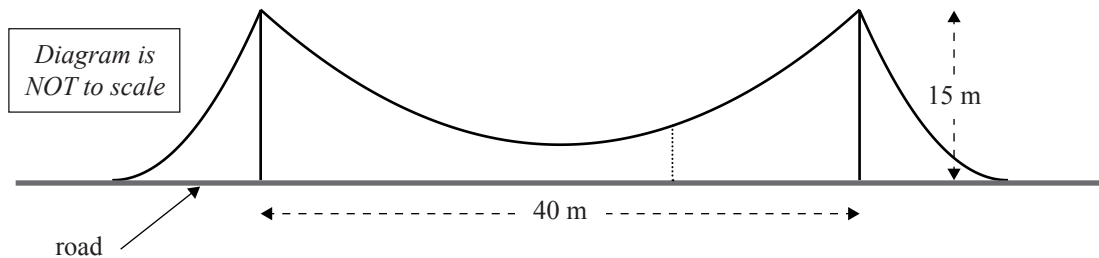
---

- (e) A symmetrical bridge has its central cable in the shape of a parabola, as shown in the diagram below.

The towers supporting the cable are each 15 m high and 40 m apart.

At the point midway between the towers, the height of the cable above the road is 3 m.

A vertical post (shown dotted in the diagram) is placed 10 m from the centre of the bridge and just touches the cable.



- (i) Use algebra to show that the post is 6 m high.

---

---

---

---

---

---

---

---

---

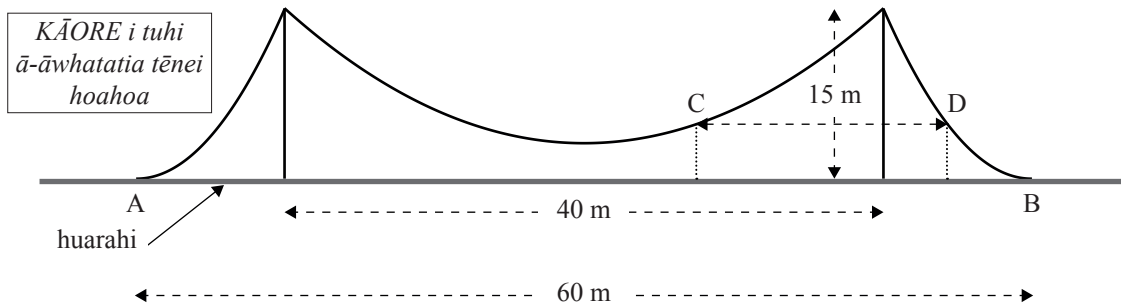
---

---

---

(ii) E 60 m te roa AB o te piriti.

He unahi me te hangarite te āhua o ngā taura o waho, ā, ka pā ki te huarahi i ngā akitu A me B.



Kimihia te tawhiti, CD, i waenga i ngā unahi e rua i te 6 m te teitei i runga ake o te huarahi (e whakaaturia ana te tawhiti CD i roto i te hoahoa).

---



---



---



---



---



---



---



---



---



---



---



---



---



---



---



---



---



---



---



---



---



---









*English translation of the wording on the front cover*

**Level 2 Mathematics and Statistics, 2016**  
**91261 Apply algebraic methods in solving problems**

9.30 a.m. Thursday 24 November 2016  
Credits: Four

91261M

Achievement	Achievement with Merit	Achievement with Excellence
Apply algebraic methods in solving problems.	Apply algebraic methods, using relational thinking, in solving problems.	Apply algebraic methods, using extended abstract thinking, in solving problems.

Check that the National Student Number (NSN) on your admission slip is the same as the number at the top of this page.

**You should attempt ALL the questions in this booklet.**

Make sure that you have Formulae Sheet L2–MATHMF.

Show ALL working.

If you need more space for any answer, use the page(s) provided at the back of this booklet and clearly number the question.

**You are required to show algebraic working in this paper. Guess-and-check methods and correct answer(s) only will generally limit grades to Achievement.**

Check that this booklet has pages 2–19 in the correct order and that none of these pages is blank.

**YOU MUST HAND THIS BOOKLET TO THE SUPERVISOR AT THE END OF THE EXAMINATION.**