

1

91010



NEW ZEALAND QUALIFICATIONS AUTHORITY
MANA TOHU MĀTAURANGA O AOTEAROA

QUALIFY FOR THE FUTURE WORLD
KIA NOHO TAKATŪ KI TŌ ĀMUA AO!

SUPERVISOR'S USE ONLY

Tick this box if you
have NOT written
in this booklet

Level 1 Geography 2021

91010 Apply concepts and basic geographic skills to demonstrate understanding of a given environment

Credits: Four

Achievement	Achievement with Merit	Achievement with Excellence
Apply concepts and basic geographic skills to demonstrate understanding of a given environment.	Apply concepts and basic geographic skills to demonstrate in-depth understanding of a given environment.	Apply concepts and basic geographic skills to demonstrate comprehensive understanding of a given environment.

Check that the National Student Number (NSN) on your admission slip is the same as the number at the top of this page.

You should attempt ALL the questions in this booklet.

Pull out Resource Booklet 91010R from the centre of this booklet.

If you need more room for any answer, use the extra space provided at the back of this booklet.

Check that this booklet has pages 2–11 in the correct order and that none of these pages is blank.

Do not write in any cross-hatched area (///). This area may be cut off when the booklet is marked.

YOU MUST HAND THIS BOOKLET TO THE SUPERVISOR AT THE END OF THE EXAMINATION.

QUESTION

Use Resource A to answer (a) and (b).

Location refers to the position of something on the earth's surface and can be given in relation to other objects.

(a) Location definition

Describe in detail the location of Hoi An at both a global and national scale.

Global location: _____

National location: _____

(b) What have been the two main economic activities in Hoi An over time?

(1) _____


(2) _____

Use Resource B to answer (c) to (f).

(c) Complete the précis map below to identify the following features found in or near Hoi An:

- Hoi An built-up area
- the island on which Traque Garden is located
- an existing all-weather road that connects Hoi An and Traque Garden

Complete the map using geographic conventions.

Title:		
Key		<div style="border: 1px solid black; padding: 5px; width: fit-content; margin: 0 auto;"> <p style="text-align: center; margin: 0;">Direction</p> </div>
		<div style="border: 1px solid black; padding: 5px; width: fit-content; margin: 0 auto;"> <p style="text-align: center; margin: 0;">Scale</p> <p style="margin: 0;">0 km</p> </div>

- (d) What crop is grown at GR 143595? _____
- (e) Which of the following Area References best illustrates a linear building pattern?
Circle your answer.

AR1458

AR1558

AR1658

- (f) Give specific evidence to suggest that religion is important to the people of Hoi An.

Use Resource C to answer (g)

- (g) (i) By how much did income from tourism increase between 2014 and 2019?

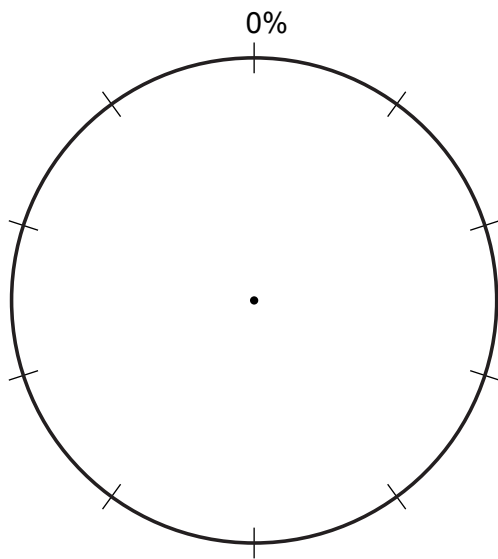
- (ii) Describe the relationship between tourist numbers and both income and waste between 2014 and 2019?

Table 1: Management of tourism waste in Hoi An (2019)

Outcome	Percentage
Recycled	30
Incinerated (burned)	50
Sent to landfill	20

- (h) Using the information from Table 1, complete the pie graph to show how tourism waste is managed in Hoi An. Complete the graph using geographic conventions.

Title: _____

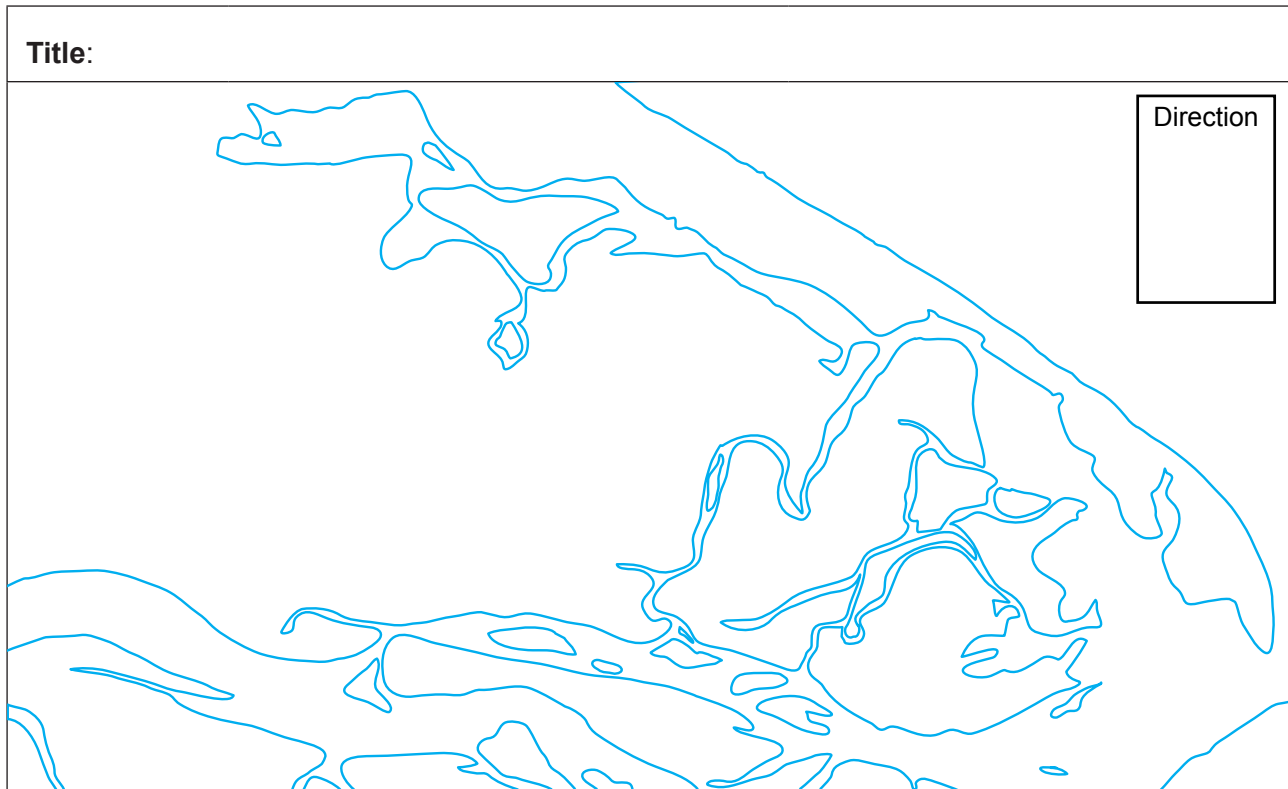


Key

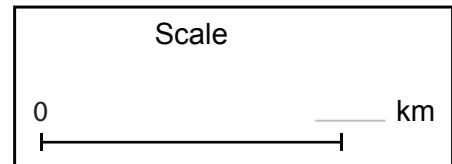
- (i) Using specific evidence from Resource C and the graph you completed for (h), describe in detail how the management of waste in Hoi An has become an issue.

SPARE PRÉCIS MAP

If you need to redo (c), use the précis map below. Make sure it is clear which answer you want marked.



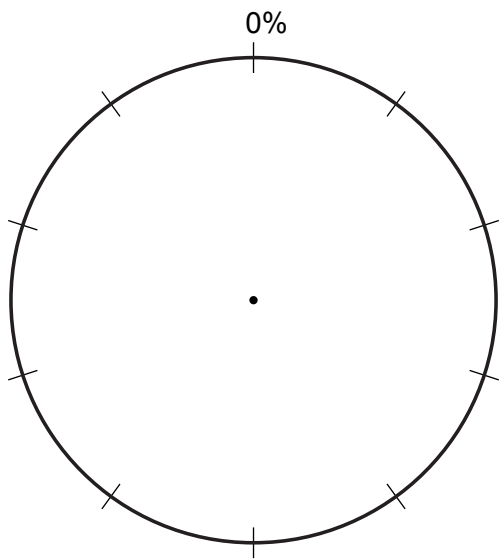
Key



SPARE PIE GRAPH

If you need to redo (h), use the graph below. Make sure it is clear which answer you want marked.

Title: _____

**Key**

91010