

91390



913900



NEW ZEALAND QUALIFICATIONS AUTHORITY  
MANA TOHU MĀTAURANGA O AOTEAROA

QUALIFY FOR THE FUTURE WORLD  
KIA NOHO TAKATŪ KI TŌ ĀMUA AO!

3

SUPERVISOR'S USE ONLY

## Level 3 Chemistry, 2016

### 91390 Demonstrate understanding of thermochemical principles and the properties of particles and substances

2.00 p.m. Monday 21 November 2016  
Credits: Five

Achievement	Achievement with Merit	Achievement with Excellence
Demonstrate understanding of thermochemical principles and the properties of particles and substances.	Demonstrate in-depth understanding of thermochemical principles and the properties of particles and substances.	Demonstrate comprehensive understanding of thermochemical principles and the properties of particles and substances.

Check that the National Student Number (NSN) on your admission slip is the same as the number at the top of this page.

**You should attempt ALL the questions in this booklet.**

A periodic table is provided in the Resource Sheet L3-CHEMR.

If you need more room for any answer, use the extra space provided at the back of this booklet and clearly number the question.

Check that this booklet has pages 2–11 in the correct order and that none of these pages is blank.

**YOU MUST HAND THIS BOOKLET TO THE SUPERVISOR AT THE END OF THE EXAMINATION.**

**Achievement**

**TOTAL**

**11**

ASSESSOR'S USE ONLY

## QUESTION ONE

ASSESSOR'S  
USE ONLY

(a) Complete the following table.

Symbol	Electron configuration
Cl <sup>17</sup>	<del>2</del> $1s^2, 2s^2, 2p^6, 3s^2, 3p^5$
Zn <sup>30</sup>	$1s^2, 2s^2, 2p^6, 3s^2, 3p^6, 4s^2, 3d^{10}$
Cr <sup>3+</sup> <del>27</del> <del>28</del> 24-3 = 21	$1s^2, 2s^2, 2p^6, 3s^2, 3p^6, 3d^3$

(b) (i) Explain why the radius of the Cl atom and the radius of the Cl<sup>-</sup> ion are different.

	Radius (pm)
Cl atom	99
Cl <sup>-</sup> ion	181

~~The chlorine ion has a~~ <sup>ion</sup> Cl<sup>-</sup> radius > Cl atom radius.

The Cl<sup>-</sup> ion has gained an extra electron ~~and~~ and the number of protons has remained the same.

This provides more electron-electron repulsion between the electrons in the energy levels so the electrons are moved further away from the nucleus, and therefore the radius is bigger than a Cl atom.

- (ii) Explain the factors influencing the trends in electronegativity and first ionisation energy down a group of the periodic table.

ASSESSOR'S  
USE ONLY

In your answer you should:

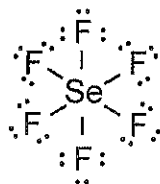
- define both electronegativity and first ionisation energy
- explain the trend in both electronegativity and first ionisation energy down a group
- compare the trend in electronegativity and first ionisation energy down a group.

Electronegativity is the ability to attract an electron, to and first ionisation energy is the energy needed for ~~a~~ one mole gaseous mole of an element to gain lose an electron. As you go down a group the electronegativity of an atom decreases as there are more electron shells preventing the positive nuclei to attract an electron due to shielding of inner shells and the electron-electron repulsion between the shells. As you go down a group the first ionisation energy increases as because of ~~the~~ the shielding from the positive nuclei, and the electron-electron repulsion between inner shells, it is easier for an atom to lose an electron to ~~p~~ become positive. So as you go down a group the electronegativity decreases but the first ionisation energy increases.

(c) (i) Complete the following table:

	$\text{ICl}_4^-$	$\text{ClF}_3$
Lewis diagram		
Name of shape	square planar	<del>trigonal pyramid</del> T-shaped

(ii) The Lewis diagram for  $\text{SeF}_6$  is shown below.



Would you expect  $\text{SeF}_6$  to be soluble in water?

Yes

No

Explain your answer in terms of the shape and polarity of  $\text{SeF}_6$ .

There are six regions of negative space around the central Se atom. These separate at a  $90^\circ$  angle for maximum separation. There are six Se-F bonds and no free pairs of electrons. This gives a shape of octahedral. Because the shape is symmetrical, the dipoles cancel out and  $\text{SeF}_6$  is non-polar. Water is a polar solvent, and only polar molecules can dissolve in polar solvents. Therefore  $\text{SeF}_6$  is not soluble in water.

Mb

## QUESTION TWO

ASSESSOR'S  
USE ONLY

The standard enthalpy of vaporisation,  $\Delta_{\text{vap}}H^\circ$ , of sodium chloride, NaCl, hydrogen chloride, HCl, and chloromethane,  $\text{CH}_3\text{Cl}$ , are given in the table below.

- (a) Identify all the attractive forces between particles of the following compounds in their liquid state.

Compound	$\Delta_{\text{vap}}H^\circ / \text{kJ mol}^{-1}$	Attractive forces
NaCl	194	ionic bond Permanent dipole attraction
HCl	16.0	hydrogen bonding covalent bond temporary dipole attraction
$\text{CH}_3\text{Cl}$	22.0	covalent bond hydrogen bonding <del>permanent dipole attraction</del>

- (b) (i) Explain why  $\Delta_{\text{vap}}H^\circ(\text{NaCl})$  is significantly higher than both  $\Delta_{\text{vap}}H^\circ(\text{HCl})$  and  $\Delta_{\text{vap}}H^\circ(\text{CH}_3\text{Cl})$ .

NaCl are have an ionic bond, which is the strongest bond that a compound can have, as this is caused by the a great difference in electronegativity, that an atom can pull an electron off another to form an electrostatic attraction so more energy is required to ~~break the intermolecular forces~~ separate the molecules. compared to HCl and  $\text{CH}_3\text{Cl}$ .

- (ii) Explain why  $\Delta_{\text{vap}}H^\circ(\text{CH}_3\text{Cl})$  is greater than  $\Delta_{\text{vap}}H^\circ(\text{HCl})$ .

~~$\text{CH}_3\text{Cl}$  has a greater~~  $\Delta_{\text{vap}}H^\circ$  for  $\text{CH}_3\text{Cl}$  is greater because it has three hydrogens bonded to the central carbon atom so more energy is needed to break the intermolecular forces between the hydrogens.

(c) (i) Define  $\Delta_{\text{fus}}H^\circ(\text{NaCl})$ .

This is the energy required to form ~~the sodium~~  
NaCl(s).

(ii) Why is  $\Delta_{\text{vap}}H^\circ(\text{NaCl})$  greater than  $\Delta_{\text{fus}}H^\circ(\text{NaCl})$ ?

~~NaCl~~ To form NaCl, less energy is required  
as the electrostatic attraction is strong between  $\text{Na}^+$   
and  $\text{Cl}^-$  that so it's easier to compared to breaking  
the ~~the~~ intermolecular forces between them as the  
electrostatic attraction is so strong.

(iii) Why does NaCl readily dissolve in water, even though the process is slightly endothermic?

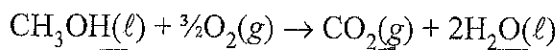


The reaction itself is spontaneous as  
the ~~NaCl~~ water molecules are able to  
attract the ~~Na<sup>+</sup> and Cl<sup>-</sup>~~ NaCl into its  
separate ions.

## QUESTION THREE

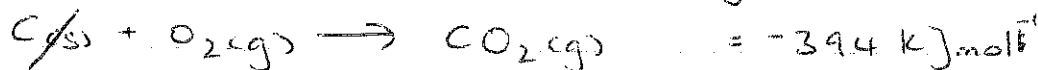
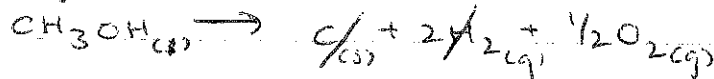
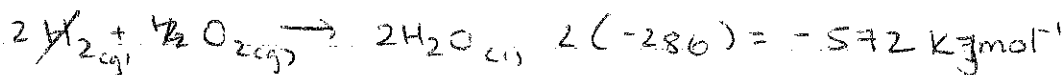

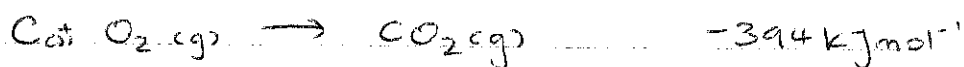
ASSESSOR'S  
USE ONLY

(a) The equation for the combustion of liquid methanol is:



Calculate the standard enthalpy of combustion of liquid methanol,  $\Delta_c H^\circ(\text{CH}_3\text{OH}(\ell))$ , using the information in the table below.

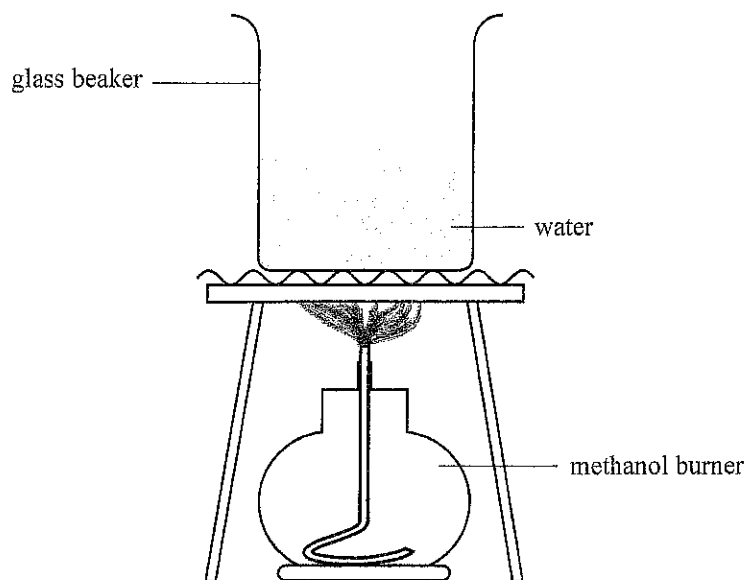
Compound	$\text{kJ mol}^{-1}$
$\Delta_c H^\circ(\text{C}(\text{s}))$	-394
$\Delta_c H^\circ(\text{H}_2(\text{g}))$	-286
$\Delta_f H^\circ(\text{CH}_3\text{OH}(\ell))$	-240



$$-572 + 240 + -394 = -726$$

$$\Delta_c H^\circ(\text{CH}_3\text{OH}(\ell)) = \underline{-726 \text{ kJ mol}^{-1}}$$

- (b) The enthalpy of combustion of liquid methanol,  $\Delta_c H^\circ(\text{CH}_3\text{OH}(\ell))$ , can also be determined by burning a known mass of methanol and measuring the temperature change in a known mass of water above the burning methanol.

ASSESSOR'S  
USE ONLY

- (i) If 2.56 g of methanol is burned, the temperature of 500 g water increases from 21.2°C to 34.5°C.

Using these results, calculate the experimental value of  $\Delta_c H^\circ(\text{CH}_3\text{OH}(\ell))$ .

The specific heat capacity of water is  $4.18 \text{ J } ^\circ\text{C}^{-1} \text{ g}^{-1}$ .

$M(\text{CH}_3\text{OH}) = 32.0 \text{ g mol}^{-1}$

$\Delta_c H^\circ = \Delta H$

$$\Delta H = m \Delta t$$

$$4.18 \times 2.56 \times 34.5$$

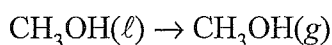
$$= -142 \text{ kJ mol}^{-1}$$



- (ii) Why is the experimental value obtained in part (b)(i) less negative than the theoretical value determined in part (a)?

This is because some of the heat energy from the methanol burned is <sup>not all moving</sup> getting lost in the towards the water but is getting lost to the atmosphere instead so not of the heat energy it being produced is being used in the experiment.

- (iii) The equation for the evaporation of liquid methanol is:



Explain the entropy changes of the system and surroundings for the evaporation of methanol.

Entropy is the amount of disorder in a <sup>substance or</sup> ~~chem~~ chemical system. As the  $\text{CH}_3\text{OH}(\ell)$  evaporates into  $\text{CH}_3\text{OH}(\text{g})$ , entropy increases as there are more ways for the particles to be disordered as there is more space between them to move in their surroundings as they change state.

**Achieved exemplar 2016**

<b>Subject:</b>	<b>Chemistry</b>	<b>Standard:</b>	<b>91390</b>	<b>Total score:</b>	<b>11</b>
<b>Q</b>	<b>Grade score</b>	<b>Annotation</b>			
1	M6	To gain excellence, the candidate needed to show an understanding that electronegativity is the attraction for bonding electrons. They also needed to explain why the Se-F bond is polar and link their answer more fully to the original question of why SeF <sub>6</sub> is insoluble in water.			
2	N2	The candidate needed to show an understanding of the difference between molecules and compounds as well as the implications of the size of a molecule on the amount of energy required to break the various forces. Defining terms is a valuable means of gaining some credit. In part (c)(ii), it was important to be able to communicate the difference between melting and evaporation through the number of bonds being broken rather than reiterating the amount of energy needed.			
3	A3	This candidate was unable to complete a calorimetry calculation. There was an understanding that heat energy would be lost to the surroundings but there was a need to link this to the water temperature not being as high, therefore a less negative enthalpy or to the need to insulate to ensure the heat energy was not lost. This candidate understood that entropy was related to disorder in a system but was not able to link this information sufficiently for a merit level answer.			